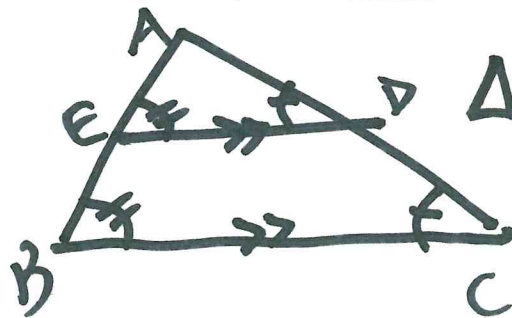


HW#3: p 388-90: 1-7, 10-11

Write proportions. p 394: 1-6

Write up C-59-61 from pp 382-3
in Geometric Truth

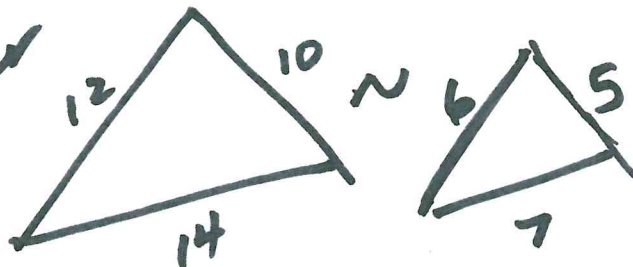
Quiz Topics on website



$\triangle AED \sim \triangle ABC$

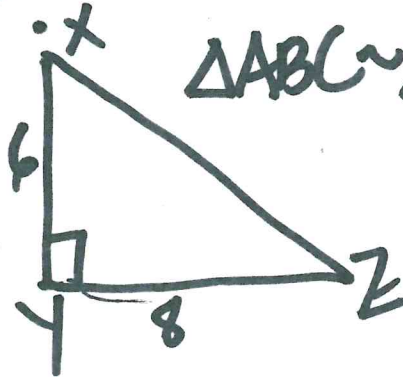
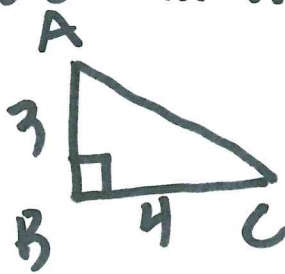
C-59
2, 2, similar

C-60
Similar



"the angles between them are congruent", then the "triangles are similar"

C-61



$\triangle ABC \sim \triangle XYZ$