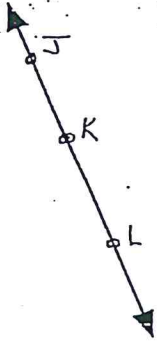



Geometry Worksheet
Chapter 1 Section 1

Give two names for each of the geometric figures.

1)



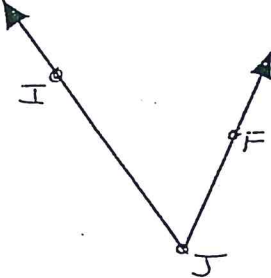
2)



3)



4)



5)



Draw the following:

6)



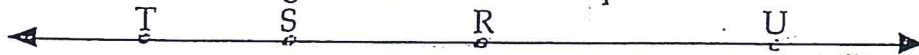
7)



8)



True or False. Use the diagram below for each question.



9) \overline{RT} is the same as \overline{TR} .

10) \overleftrightarrow{RT} is the same as \overleftrightarrow{TR} .

11) \overrightarrow{RT} is the same as \overrightarrow{TR} .

12) \overrightarrow{RT} is the same as \overrightarrow{RU} .

13) \overrightarrow{RT} is the same as \overrightarrow{RS} .

14) \overline{TS} is the same as \overline{TR} .