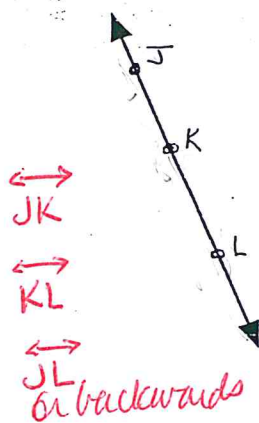


Geometry Worksheet
Chapter | Section 1

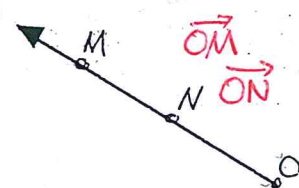
~~Timothy~~
~~Scarfoglio~~

Give two names for each of the geometric figures.


1)



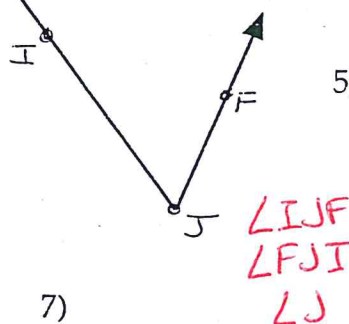
2)



3)



4)

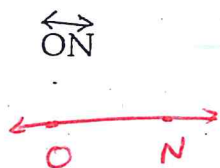


5)

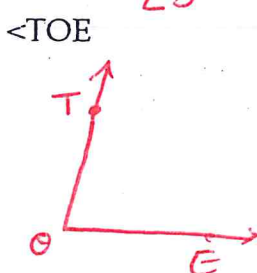


Draw the following:

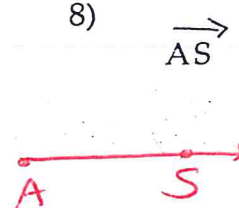
6)



7)



8)



True or False. Use the diagram below for each question.



9) \overline{RT} is the same as \overline{TR} . True

10) \overleftrightarrow{RT} is the same as \overleftrightarrow{TR} . True

11) \overrightarrow{RT} is the same as \overrightarrow{TR} . False (diff endpt)

12) \overrightarrow{RT} is the same as \overrightarrow{RU} . False (opp direction)

13) \overrightarrow{RT} is the same as \overrightarrow{RS} . True

14) \overline{TS} is the same as \overline{TR} . False (diff endpt)